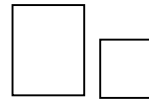
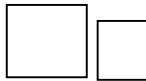
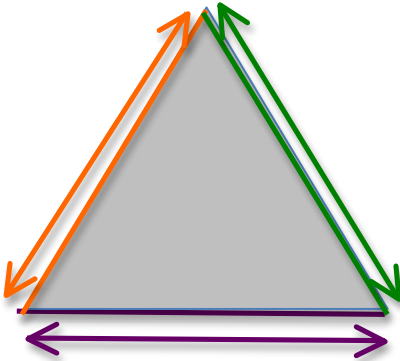
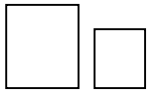



Le périmètre d'un triangle



Attention, il faut préciser si on a des mm, cm, dm. m.....



$$\square + \square + \square = \square \square$$



Le périmètre c'est le pourtour !